


1 Complete the sentences.



There are  apples in each bag.

There are  bags.

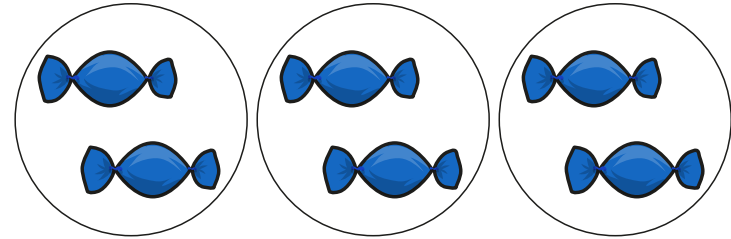
There are  equal groups of

There are  apples altogether.

$$\square + \square + \square + \square = \square$$



2 How many sweets are there?



$$\square + \square + \square = \square$$

There are  sweets.



3 How many marbles are there?

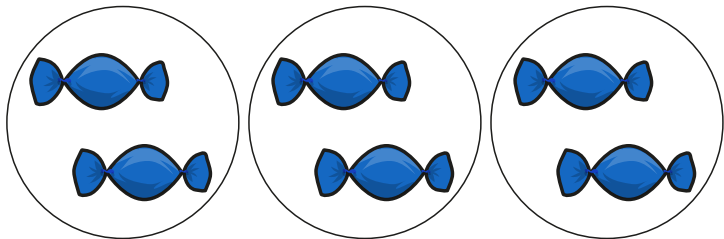


$$\square + \square + \square = \square$$

There are  marbles.



2 How many sweets are there?



$$\square + \square + \square = \square$$

There are  sweets.

3 How many marbles are there?




$$\square + \square + \square = \square$$

There are  marbles.



4 How many candles are there?



$$\square + \square + \square + \square = \square$$

There are  candles.



5 Use counters to show the equal groups.

Complete the number sentences.

a)  $2 + 2 + 2 + 2 = \square$

b)  $5 + 5 + 5 + 5 + 5 = \square$



6 There are 7 equal groups of 5 counters.

How many counters are there altogether?

There are  counters altogether.

