



Geography

Magical Mapping

Mapping Our Oceans and Seas

Aim

- I can use key words to explain human and physical features.
- I can name and locate the world's five main oceans.

Success Criteria

- I can explain 5 key words to my partner.
- I can sort key words into those which are 'human' and those which are to do with 'physical' geography.
- I can use an atlas to find (locate) the five main oceans of the world.
- I can explain the difference between seas and oceans.
- I can begin to locate some of the world's main seas.

Key Words




human


physical

man-made

natural



sea



ocean



water

mass

salt water

Match-Up!








Work together to match up the key word with the meaning (definition).

Which words are 'human' (man-made) and which are 'physical' (natural) geography?

Can you think of your own key words which are 'human' or 'physical' features?



Magical Mapping Match-Up Cards

| Keyword | Definition |
|---|--|
|  Beach | A pebbly or sandy shore, by the sea. |
|  Coast | A part of land near the sea. |
|  Forest | A large area covered with trees. |
|  Mountain | A large, steep hill. |
|  Sea | A smaller area of water that is found where the land and water meet. |



Geography | Year 21 Magical Mapping | Mapping Our Oceans and Seas | Lesson 6

Magical Mapping Match-Up Cards

| Definition |
|--|
| A layer of earth in which plants grow. |
| A low area of land between hills or mountains. |
| All the plant life in an area. |
| The four times of a year with different weather changes. |
| What the atmosphere is like - sunny, hot, dry, rainy, cold, cloudy... |
| A large town. |
| A built up area that is bigger than a village but smaller than a city. |
| A group of houses and buildings smaller than a town. |
| A building where goods are made. |

Geography | Year 21 Magical Mapping | Mapping Our Oceans and Seas | Lesson 6

Oodles of Oceans

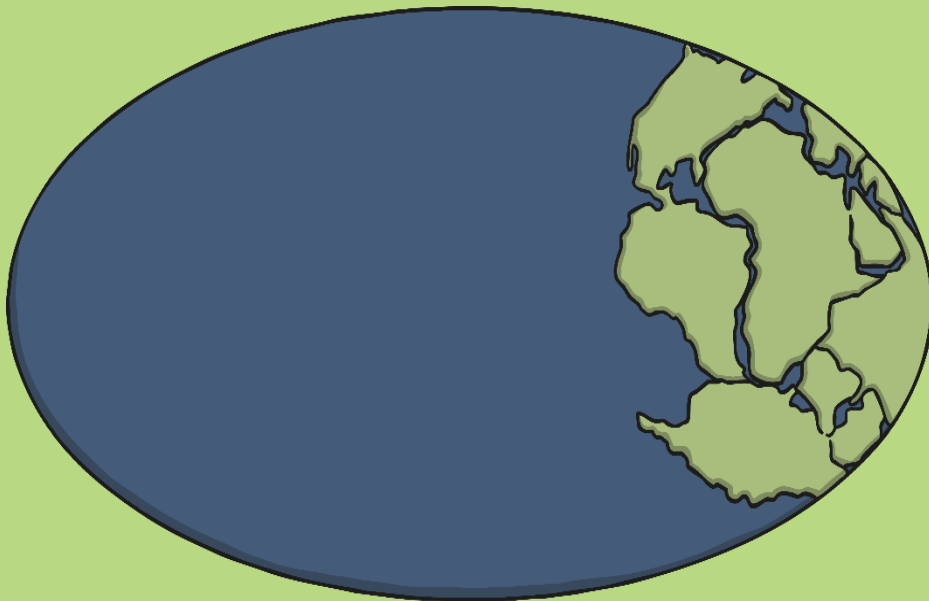


- What is an ocean?
- What is the difference between a sea and an ocean?
- Can you name any of the world's major oceans?
- How is an ocean or sea shown on a map?

Oodles of Oceans



Oceans are large areas of salt water joined to each other but they are separated into five major sections. Oceans cover around 70% of the Earth's surface.



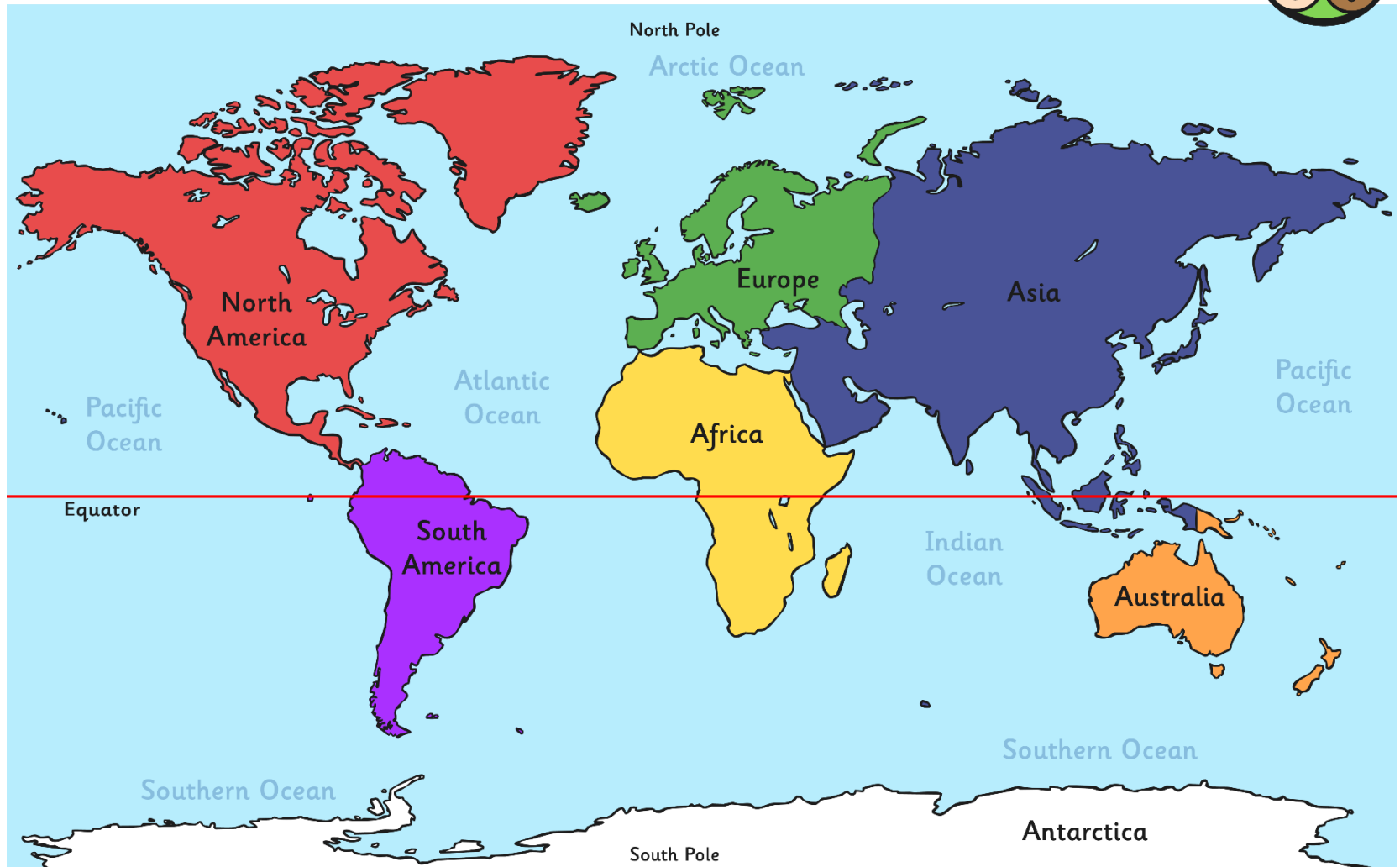
The Pacific Ocean is the largest ocean.




Seas are smaller areas of water and are found where the land and water meet.



Oodles of Oceans



Quiz Time



Answer these questions to see how much you have learned about Oceans and Seas. Click on the questions to reveal the answers when you have done.

1.

How many oceans are there in the world?

2.

Which is the largest ocean?

3.

Which is the smallest ocean?

4.

Which ocean surrounds Antarctica?

5.

Which ocean is the furthest North?

6.

Which ocean can be found between North America and Africa?

7.

Which ocean can be found between North America and Asia?

8.

What is the other name for the Antarctic Ocean?

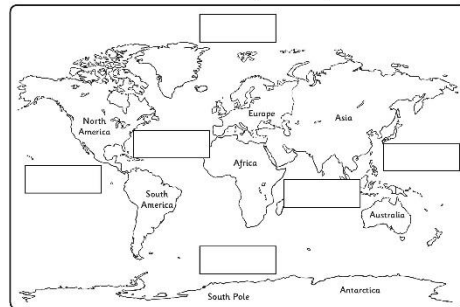
Mapping Our Oceans and Seas



Use an atlas and your activity sheet to locate the world's main oceans and seas.

★ Mapping Our Oceans

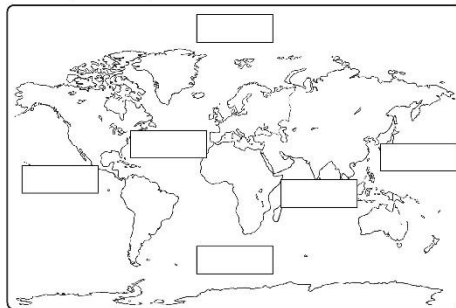
Cut out the ocean names and stick them in the correct place on the map.



Atlantic Ocean Pacific Ocean Pacific Ocean Indian Ocean Arctic Ocean Antarctic Ocean

★★ Mapping Our Oceans

Write the ocean names in the correct boxes on the map. Then draw arrows from the continent names to the correct places on the map.



North America South America Africa Australia Europe Asia Antarctica

Use these ocean names to help you.

Atlantic Ocean Pacific Ocean Pacific Ocean Indian Ocean Arctic Ocean Antarctic Ocean

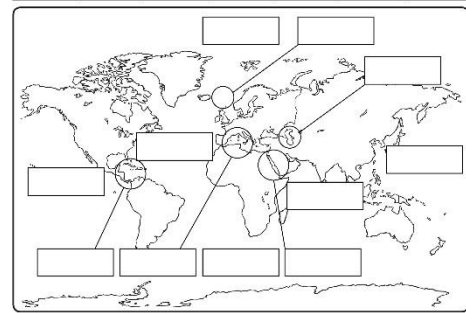
★★★ Mapping Our Oceans

1. Write the ocean names in the correct boxes on the map. Use these names to help you.

Atlantic Ocean Pacific Ocean Pacific Ocean Indian Ocean Arctic Ocean Antarctic Ocean

2. Draw arrows from the continent names, to the correct places on the map.

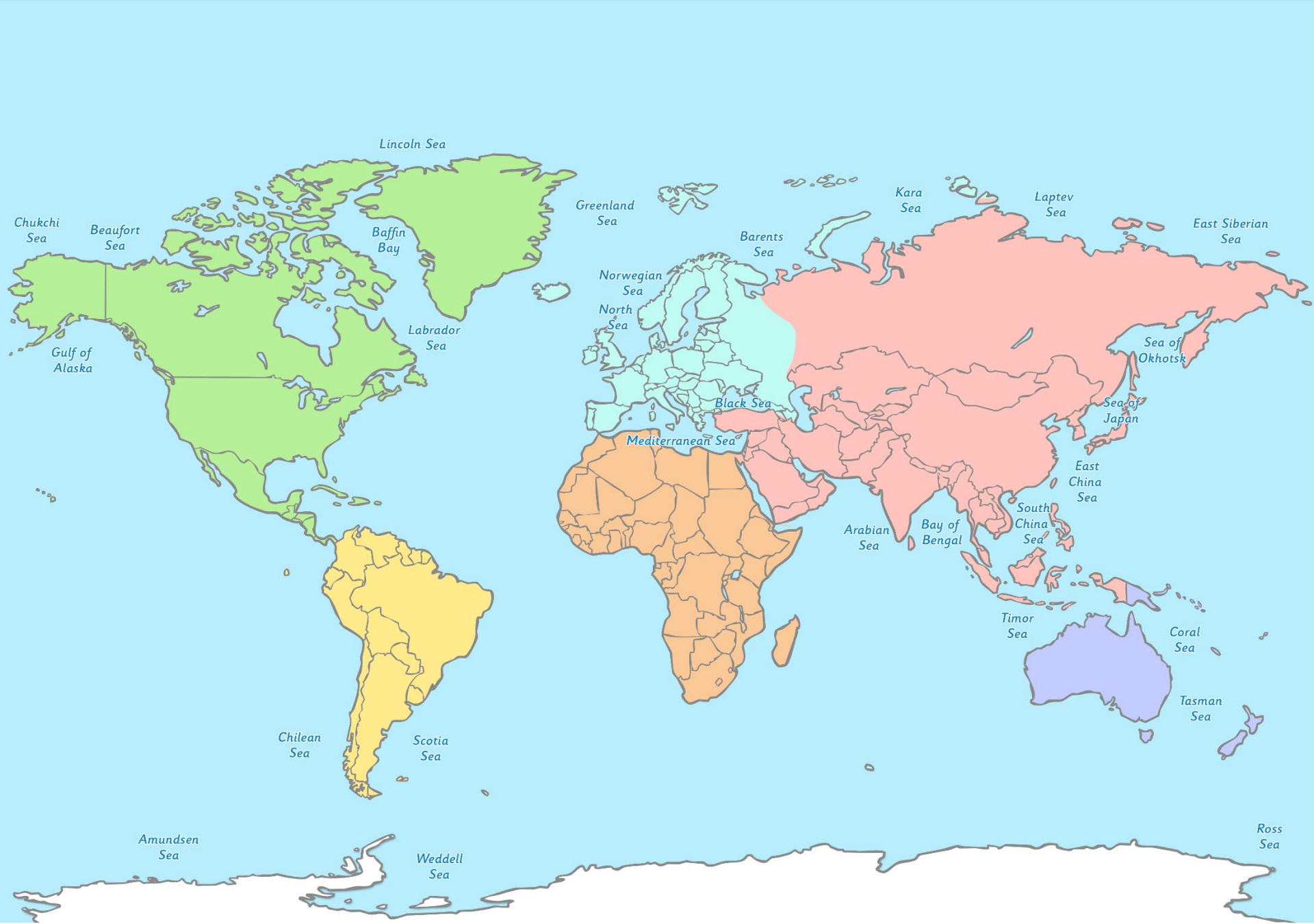
North America South America Africa Australia Europe Asia Antarctica



3. Write the name of the sea in the correct box. Use these names to help you.


North Sea Red Sea Caribbean Sea Mediterranean Sea Caspian Sea

Challenge: Can you label some of the world's main seas?



[Click here to go back](#)

What Have I Learnt?



What is a map? Can you name two types of maps.

Can you name two key features of a map?

Can you draw two map symbols and say what they show?

What are the four points of a compass?

What does 'aerial view' mean?

Can you name some of the main oceans of the world?



Aim



- I can use key words to explain human and physical features.
- I can name and locate the world's five main oceans.

Success Criteria

- I can explain 5 key words to my partner.
- I can sort key words into those which are 'human' and those which are to do with 'physical' geography.
- I can use an atlas to find (locate) the five main oceans of the world.
- I can explain the difference between seas and oceans.
- I can begin to locate some of the world's main seas.

